


GAME
ON

4 5 6 7 8 10 11 12



A

GAME
ON

2

3

5










6

7

8

9

10



B

GAME
ON

2

3

4










5

7

8

9

10



C

GAME
ON

3

4

5










6

7

8

9

11



D

GAME
ON

0

1

3










4

5

6

7

8



E

GAME
ON

2

3

4










6

7

8

9


10



F

GAME
ON


6 7 8 9 10 11 13 14



G

GAME
ON


6 7 8 9 10 11 12 14



H


GAME
ON

6 8 9 10 11 12 13 14



GAME
ON

6 7 9 10 11 12 13 14



K

GAME
ON

0

2

3










4

5

6

7


8



GAME
ON

10 11 12 13 14


16 17 18



M

GAME
ON


6 7 8 9 10 12 13 14



N

GAME
ON

8 9 10 11 12 13 14 15




O

GAME
ON

9 10 11 12 13


15 16 17



Q

GAME
ON

13 14 15 16 17 18 20 21




P

GAME
ON

13 14 15 16

18 19 20 21



R

GAME
ON

4

5

6










7

8

9

10

11




S

GAME
ON

13 14 15 16 17

19 20 21



T



Stjerneløb - tallinje

Svar	Find opgaven hvor tallet (..) mangler?	Gå videre til opgaven hvor (...) mangler (svar)
A	9	5 (F)
B	4	15 (M)
C	6	3 (S)
D	10	8 (K)
E	2	7 (J)
F	5	19 (P)
G	12	11 (N)
H	13	4 (B)
J	7	9 (A)
K	8	17 (R)
L	1	12 (G)
M	15	6 (C)
N	11	10 (D)
O	16	14 (Q)
P	19	13 (H)
Q	14	2 (E)
R	17	16 (O)
S	3	18 (T)
T	18	1 (L)

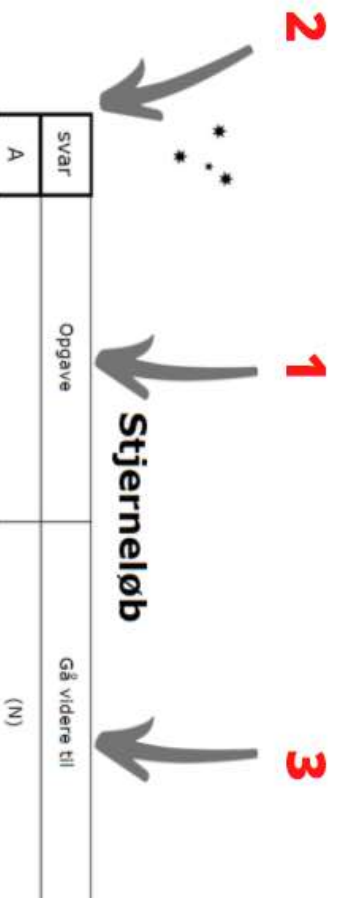
Vejledning til Stjerneløb - type 1

Tallinje

Inddel eleverne i mindre grupper på 2-3 elever.

Fordeel kortene (A-T) i et afgrænset område - inde eller ude.

Send grupperne ud på opgaver efter følgende model:



1. Giv hver gruppe en opgave. Hvis man vil undgå kø-dannelser samt at de "snupper" svaret fra en anden gruppe frem for at finde svaret selv, sendes kun én gruppe til hver opgave
2. Når de vender tilbage med svaret, skal de sige det bogstav der står på det ark, der har svaret på deres opgave.
3. Send dem videre til næste opgave. Svaret på den nye opgave er angivet i () på opgaven såvel som i den alfabetiske rækkefølge længst til venstre.

Grupperne skal finde kortene som mangler dét tal de får givet af den voksne. Derefter skal de komme tilbage og fortælle det rigtige bogstav på kortet.

Tidsforbrug:
15-45 min